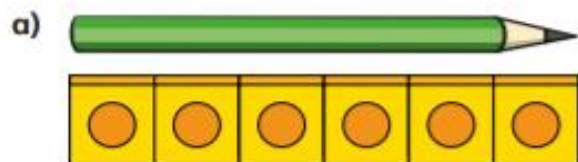


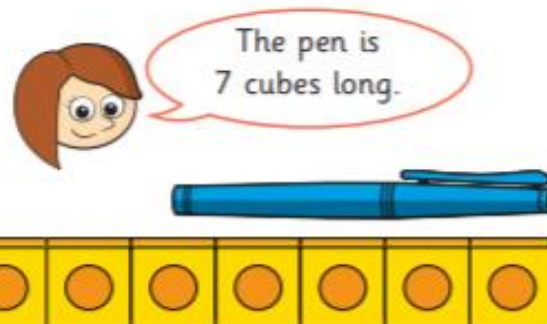
Measure length (1)

1 How many cubes long is each object?



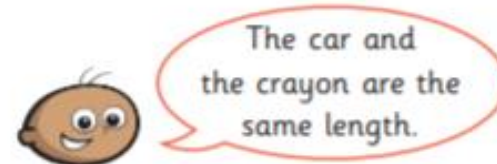
d) Use cubes to measure some objects in your classroom.

2



Do you agree with Rosie?
Talk about it with a partner.

3 Tommy is measuring objects.



Do you agree with Tommy?



2



The pen is
7 cubes long.



Do you agree with Rosie?
Talk about it with a partner.

3 Tommy is measuring objects.



The car and
the crayon are the
same length.

Do you agree with Tommy?

4

Measure objects in your classroom with these items.

- cubes
- hands
- sticks

Which object is the longest?

Which is the shortest?

How do you know?

